
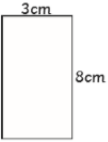
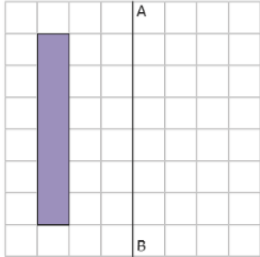


11th February

<p>Section 1 I am a two-digit number. I am even. I have five more ones than tens. The sum of my digits is 11. What number am I? <input type="text"/></p>	<p>Section 2 Write the factor pairs of 14. <input type="text"/> Write the common factors of 5 and 15. <input type="text"/></p>	<p>Section 3 64 equal pieces of pizza are cut from 8 pizzas. Into how many pieces is each pizza cut? <input type="text"/></p>	<p>Section 4 Use this visual representation to calculate: $1\frac{2}{3} \times 2 =$ <input type="text"/> </p>
<p>Section 5 Ring the correct percentage to match the following fractions: <input type="checkbox"/> $\frac{1}{4}$ 50% 25% 75% <input type="checkbox"/> $\frac{3}{4}$ 30% 75% 40%</p>	<p>Section 6 What is the area of this rectangle?  <input type="text"/></p>	<p>Section 7 Draw an angle of 60°</p>	<p>Section 8 Reflect this shape about the line AB </p>

English - READING PASSPORT. Please ensure you have completed at least 5 activities

Maths - page 41 - area mathematics

Spellings - Identify 9 words from the year 5/6 spelling list you need to practise