

HOMEWORK SHEET

Due: Monday 23rd April

READING RACE TRACK

WHO WILL WIN THE READING RACE TRACK THIS TERM?

TRY AND READ EVERY NIGHT AND IT COULD BE YOU!



I will collect reading records on Friday.

Spellings

action

station

fiction

option

reflection

attention

competition

father

plant

break

QUICK QUIZZES

Try and answer the grammar and punctuation, reasoning and arithmetic challenges by yourself.

You might decide to split each area across the week rather than doing it all at once.

If there are any questions you are unsure of please leave blank and we can go through it together.

Talking Time

Talk to an adult about the following question:

Where is the seaside and what sorts of things might you see?

Write a couple of sentences about what you discussed then draw a picture in your yellow book.

Don't forget your punctuation and neat handwriting!

Grammar and punctuations

Add the correct punctuation on the end of these sentences.

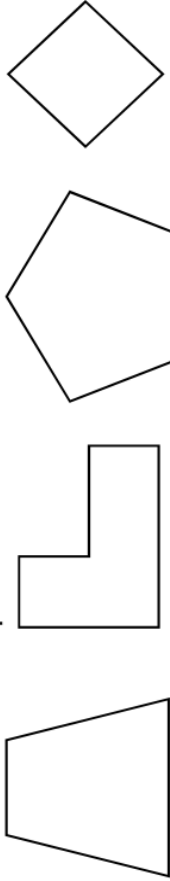
Can you write the shortened form of the words ?

1. What time do you go to bed
2. James went swimming with his family
3. How beautiful you look today
4. Are you late for school

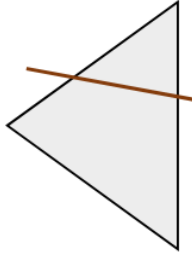
1. Is not
2. They have
3. Does not
4. You are

Reasoning

1. Circle the shape that has 5 sides.



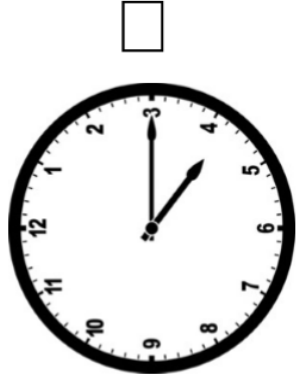
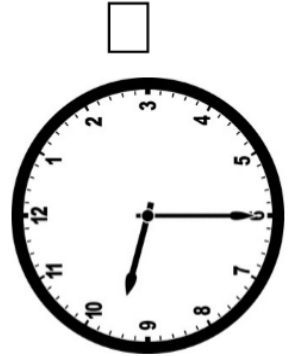
2. Emma drew a line of symmetry. Is she correct?



Yes

No

3. Debby is at the train station. Her train leaves at quarter past 4. Which clock shows right time?



Arithmetic

Answer the questions

$$10 + \boxed{} = 48$$
$$16 + 44 = \boxed{}$$

$$\frac{1}{2} \text{ of } 40 = \boxed{}$$

$$\frac{3}{4} \text{ of } 16 = \boxed{}$$

$$10 + 20 + \boxed{} =$$

$$5 \times 4 = \boxed{}$$

$$50 - 10 - 13 = \boxed{}$$

$$30 \div 3 = \boxed{}$$

4. Bob has 10 bags of marbles. Each bag holds 7 marbles. How many marbles he have in total? Show your working.