

Homework Sheet

Due: Monday 14th May

Reading Race Track

Who will win the reading race track this term?

Try and read every night and it could be you!



I will collect reading records on Friday.

Spellings

untie

undo

unfair

unwrap

unable

unacceptable

dislike

disappear

disagree

disappointed

QUICK QUIZZES

Try and answer the grammar and punctuation, reasoning and arithmetic challenges by yourself.

You might decide to split each area across the week rather than doing it all at once.

If there are any questions you are unsure of please leave blank and we can go through it together.

Talking Time

Talk to an adult about the following question:

Who is Meghan Markle?

Write a couple of sentences about what you discussed in your yellow book then draw a picture.

Don't forget your punctuation and neat handwriting!

Grammar and punctuation

www.themumeducates.com

Spellings

1. Write the missing punctuation mark to complete the sentences below.
 the sentences below. 2. Tick the correct word to complete the sentence below.

I ate biscuits _____ I was hungry.

- What time is it or
- My name is Fred when
- Put your shoes away because
- What an amazing day it was if

1. picture
2. mission
3. corner
4. lamb
5. teeth

Reasoning

1. Here are the prices of toys in a toy shop.



Doll
37p



Lego
20p



Toy soldier
45p

Aliya buys 2 dolls and Lego. How much money does she spend?

Ben buys Lego and 1 toy soldier. Did he spend more than Aliya?

2. Can you find the missing numbers?

5, 15, ____, 35, 45, ____

3. Tick the correct lines of symmetry.



4. I am thinking of a 3D shape with 1 face, 0 vertices and 0 edges.

What shape am I thinking of?

Arithmetic

$$26 + \boxed{} = 38 \qquad \frac{3}{4} \text{ of } 16 = \boxed{}$$

$$88 - \boxed{} = 19 \qquad \frac{1}{4} \text{ of } 36 = \boxed{}$$

$$28 + 17 + 3 = \boxed{} \qquad 9 \times \boxed{} = 18$$

$$25 - 5 - 9 = \boxed{} \qquad 22 \div 2 = \boxed{}$$

5. Sara bakes 7 trays of muffins. Each tray contains 5 muffins. She sells 16 muffins and eats 5.

How many muffins does she have left?
 Show your working.




Homework Sheet

Due: Monday 14th May

Reading Race Track

Who will win the reading race track this term?

Try and read every night and it could be you!



I will collect reading records on Friday.

Spellings

Maths

Complete the arithmetic questions on the sheet.

If you are not sure how to answer a question ASK for help!

Talking Time

Talk to an adult about the following question:


Who is Meghan Markle?

Write a couple of sentences about what you discussed in your yellow book then draw a picture. you discussed in your yellow book then draw a picture.

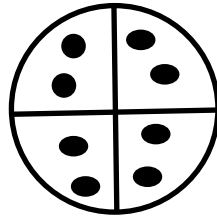
Don't forget your punctuation and neat handwriting!

Find the fraction of these numbers by drawing one whole then sharing the numbers equally.

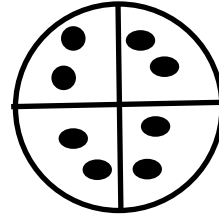
$$\frac{1}{2} \text{ Of } 6 = 3$$



$$\frac{1}{4} \text{ Of } 8 = 2$$



$$\frac{2}{4} \text{ Of } 8 = 4$$



$$\frac{1}{2} \text{ of } 12 =$$

$$\frac{1}{2} \text{ of } 18 =$$

$$\frac{1}{4} \text{ of } 16 =$$

$$\frac{1}{4} \text{ of } 32 =$$

$$\frac{1}{2} \text{ of } 28 =$$

$$\frac{1}{2} \text{ of } 16 =$$

$$\frac{1}{4} \text{ of } 24 =$$

$$\frac{1}{4} \text{ of } 20 =$$

$$\frac{2}{4} \text{ of } 20 =$$

$$\frac{2}{4} \text{ of } 24 =$$