

Homework Sheet

Due: Monday 18th June

Reading Race Track

Who will win the reading race track this term?

Try and read every night and it could be you!



I will collect reading records on Friday.

Spellings

their

they're

there

pupil

pencil

fossil

tranquil

nostril

prove

possession

Maths

How much can you remember about the properties of 3D shapes?

Remember to use faces, vertices and edges when describing their properties.





True or false?

If there were no plants on Earth humans would not exist.

Write a couple of sentences about what you discussed in your yellow book.

Don't forget your punctuation and neat handwriting!

3D Shape Quiz

shape	name	properties
		
		
		
		

Write down everything you know about this shape.



Write down everything you know about this shape.




Write down everything you know about this shape.



Which shape is the odd one out?
Explain your reason why.



Which shape is the odd one out?
Explain your reason why.




Homework Sheet

Due: Monday 18th June

Reading Race Track

Who will win the reading race track this term?

Try and read every night and it could be you!



I will collect reading records on Friday.

Spellings

Number bonds to 20

Use your number bonds to complete the sheet independently.

Talking Time

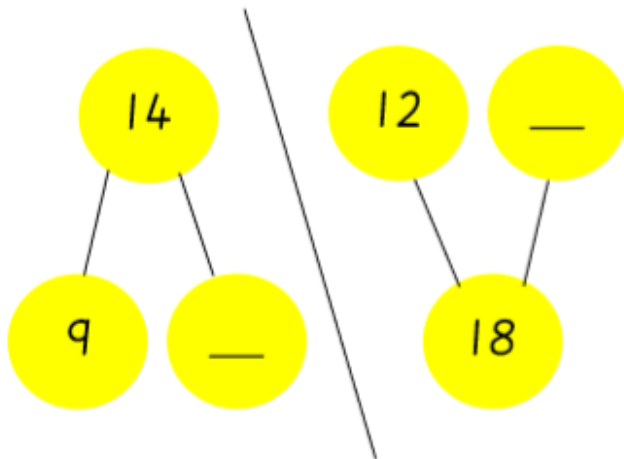
True or false?

If there were no plants on Earth humans would not exist.

Write a couple of sentences about what you discussed in your yellow book.

Don't forget your punctuation and neat handwriting!

Complete the part whole models.



Circle two numbers that make 15.



To open the safe, both numbers must add together to make 20. What numbers could open the safe?



Find three ways of making 13.

$$\underline{\quad} + \underline{\quad} = 13$$

$$\underline{\quad} + \underline{\quad} = 13$$

$$\underline{\quad} - \underline{\quad} = 13$$

Find three ways of making 19.

$$\underline{\quad} + \underline{\quad} = 19$$

$$\underline{\quad} + \underline{\quad} = 19$$

$$\underline{\quad} - \underline{\quad} = 19$$

Which bone does the dog need to eat to match the number on his food bowl?

