

3rd February


Answer these questions as quickly as you can. Record your time.

Section 1
Write these Roman Numerals as numbers:

XXXVI

LXXIX

Section 2
What square number does this represent?



Section 3
Calculate:

$$\begin{array}{r} 209 \\ \times 5 \\ \hline \end{array}$$

$$3 \overline{)675}$$

Section 4
Calculate:

$$\frac{3}{5} + \frac{1}{5} = \text{ }$$

$$\frac{9}{10} - \frac{8}{10} = \text{ }$$

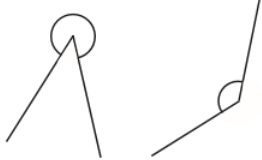
Section 5
Write the following fractions as decimals:

$$\frac{9}{10} \text{ }$$

$$\frac{4}{10} \text{ }$$

$$\frac{1}{10} \text{ }$$

Section 7
Identify these angles:



Section 8

Lane swimming 1	0700
Parent and toddler	1000
Lane swimming 2	1130
Adult lessons	1245
Lane swimming 3	1415
Leisure swim	1545
Child lessons	1700
Leisure swim	1830
Lane swimming 4	2000
Pool closes	2130

use the swimming pool time table to answer these questions.

Which is the longest lane swimming session?

For how long are there swimming lessons?

Section 6
What is the total volume in litres of milk drink sold in a pack of seven 65ml cartons?

English - page 22 and Strive for 5.

Maths - above & mathletics. I will check to see if you have been on!

	1st attempt	2nd attempt	3rd attempt
doubt			
island			
lamb			
solemn			
thistle			
autumn			
build			
receipt			
ascend			
disciple			

3rd February


Answer these questions as quickly as you can. Record your time.

Section 1
Write these Roman Numerals as numbers:

XXXVI

LXXIX

Section 2
What square number does this represent?



Section 3
Calculate:

$$\begin{array}{r} 209 \\ \times 5 \\ \hline \end{array}$$

$$3 \overline{)675}$$

Section 4
Calculate:

$$\frac{3}{5} + \frac{1}{5} = \text{ }$$

$$\frac{9}{10} - \frac{8}{10} = \text{ }$$

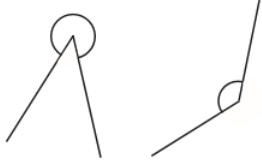
Section 5
Write the following fractions as decimals:

$$\frac{9}{10} \text{ }$$

$$\frac{4}{10} \text{ }$$

$$\frac{1}{10} \text{ }$$

Section 7
Identify these angles:



Section 6
What is the total volume in litres of milk drink sold in a pack of seven 65ml cartons?

Section 8

Lane swimming 1	0700
Parent and toddler	1000
Lane swimming 2	1130
Adult lessons	1245
Lane swimming 3	1415
Leisure swim	1545
Child lessons	1700
Leisure swim	1830
Lane swimming 4	2000
Pool closes	2130

use the swimming pool time table to answer these questions.

Which is the longest lane swimming session?

For how long are there swimming lessons?

English - page 22 and Strive for 5.

Maths - above & mathletics. I will check to see if you have been on!

	1st attempt	2nd attempt	3rd attempt
courageous			
outrageous			
nervous			
famous			
adventurous			
advantageous			
ridiculous			
carnivorous			
rapturous			
torturous			