

10th February

Answer these questions as quickly as you can. Record your time.

Section 1

I am a two-digit number.

I am even.

I have five more ones than tens.

The sum of my digits is 11.

What number am I?

Section 2

Write the factor pairs of 14.

Write the common factors of 5 and 15.

Section 3

64 equal pieces of pizza are cut from 8 pizzas. Into how many pieces is each pizza cut?

Section 4

Use this visual representation to calculate:

$$1\frac{2}{3} \times 2 = \text{[]}$$



Section 5

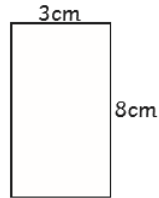
Ring the correct percentage to match the following fractions:

$\frac{1}{4}$ 50% 25% 75%

$\frac{3}{4}$ 30% 75% 40%

Section 6

What is the area of this rectangle?

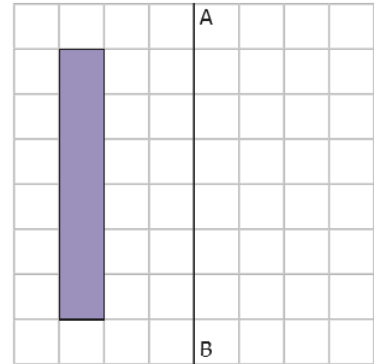


Section 7

Draw an angle of 60°

Section 8

Reflect this shape about the line AB



English - page 23 and Strive for 5.

Maths - Above & mathematics. I will check to see if you have been on!

	1st attempt	2nd attempt	3rd attempt
amateur			
ancient			
awkward			
criticise			
excellent			
foreign			
pronunciation			
symbol			
yacht			
equipment			

10th February

Answer these questions as quickly as you can. Record your time.

Section 1

I am a two-digit number.

I am even.

I have five more ones than tens.

The sum of my digits is 11.

What number am I?

Section 2

Write the factor pairs of 14.

Write the common factors of 5 and 15.

Section 3

64 equal pieces of pizza are cut from 8 pizzas. Into how many pieces is each pizza cut?

Section 4

Use this visual representation to calculate:

$$1\frac{2}{3} \times 2 = \text{[]}$$



Section 5

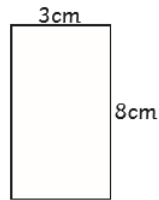
Ring the correct percentage to match the following fractions:

$\frac{1}{4}$ 50% 25% 75%

$\frac{3}{4}$ 30% 75% 40%

Section 6

What is the area of this rectangle?

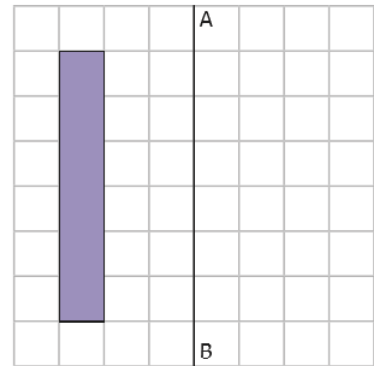


Section 7

Draw an angle of 60°

Section 8

Reflect this shape about the line AB



English - page 23 and Strive for 5.

Maths - Above & mathematics. I will check to see if you have been on!

	1st attempt	2nd attempt	3rd attempt
twinkle			
merriment			
happiness			
plentiful			
penniless			
happily			
prettiest			
nastiness			
pitiful			
silliness			