

# 24th February

Answer these questions as quickly as you can. Record your time.

**Section 1**  
Order the following numbers from smallest to largest.

2929	2299	2292	2992
------	------	------	------

--	--	--	--

**Section 2**  
Three classes of children collect some money for Comic Relief. The total collected was £205. Two of the classes collected £76 and £68. How much did the third class collect?

**Section 3**  
A teacher wants to arrange 32 children into equal groups. Explain how the teacher may do this.

\_\_\_ groups of \_\_\_ children  
 \_\_\_ groups of \_\_\_ children  
 \_\_\_ groups of \_\_\_ children  
 \_\_\_ groups of \_\_\_ children  
 \_\_\_ groups of \_\_\_ children  
 \_\_\_ groups of \_\_\_ child

**Section 4**  
Convert the improper fractions into mixed fractions.

$\frac{7}{2}$  →

$\frac{4}{3}$  →

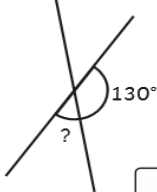
$\frac{9}{5}$  →

**Section 5**  
Write the decimal fraction that is equivalent to the fraction.


$\frac{1}{2}$	
$\frac{1}{4}$	
$\frac{1}{10}$	

**Section 6**  
Draw a square with a perimeter of 20cm (not to scale). Write the length of the side.

**Section 7**  
Calculate the missing angle:



**Section 8**  
Estimate the weight of a can of coke.



English - Strive for 5.

History - Research facts on the Commonwealth and then produce a fact file in your homework books. (You have 2 weeks to complete this)

Maths - Above & mathematics. I will check to see if you have been on!

	1st attempt	2nd attempt	3rd attempt
ancient			
science			
species			
efficient			
deficient			
glacier			
scientists			
sufficient			
emergencies			
inefficient			

# 24th February

Answer these questions as quickly as you can. Record your time.

**Section 1**  
Order the following numbers from smallest to largest.

2929	2299	2292	2992
------	------	------	------

--	--	--	--

**Section 2**  
Three classes of children collect some money for Comic Relief. The total collected was £205. Two of the classes collected £76 and £68. How much did the third class collect?

**Section 3**  
A teacher wants to arrange 32 children into equal groups. Explain how the teacher may do this.

\_\_\_ groups of \_\_\_ children  
 \_\_\_ groups of \_\_\_ children  
 \_\_\_ groups of \_\_\_ children  
 \_\_\_ groups of \_\_\_ children  
 \_\_\_ groups of \_\_\_ children  
 \_\_\_ groups of \_\_\_ child

**Section 4**  
Convert the improper fractions into mixed fractions.

$\frac{7}{2}$  →

$\frac{4}{3}$  →

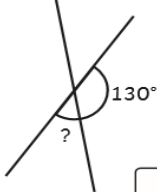
$\frac{9}{5}$  →

**Section 5**  
Write the decimal fraction that is equivalent to the fraction.


$\frac{1}{2}$	
$\frac{1}{4}$	
$\frac{1}{10}$	

**Section 6**  
Draw a square with a perimeter of 20cm (not to scale). Write the length of the side.

**Section 7**  
Calculate the missing angle:



**Section 8**  
Estimate the weight of a can of coke.



English - Strive for 5.

History - Research facts on the Commonwealth and then produce a fact file in your homework books. (You have 2 weeks to complete this)

Maths - Above & mathletics. I will check to see if you have been on!

	1st attempt	2nd attempt	3rd attempt
naughty			
caught			
fraught			
automatic			
astronaut			
cause			
author			
applaud			
taught			
audience			