

9th March

Answer these questions as quickly as you can. Record your time.

Section 1

Continue these linear sequences.

352, 1352 _____, _____, _____

43 908, 42 908, _____, _____, _____

78 612, 88 612, _____, _____, _____

39 901, 29 901, _____, _____, _____

Section 2

Ring the prime numbers:

11 12 13 14

15 16 17 18

19 20 21 22

23 24 25 26

27 28 29 30

Section 3

Calculate:

$6 \times 30 =$

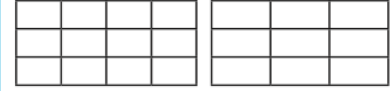
$90 \times 5 =$

$70 \times 80 =$

$10 \times 120 =$

Section 4

Shade the following rectangles so that the same fraction is shaded in both and write the fraction that each represents.



Section 5

Round the following numbers to the nearest whole number and nearest tenth:

4.55

9.03

7.92

68.05

Section 6

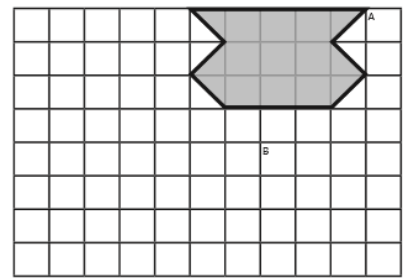
Afternoon lessons start at 12:50 and end at 15:10. How long are the afternoon lessons?

Section 7

Use a ruler to draw a rectangle where the longer side is three times the length of the shorter side.

Section 8

Translate this shape from point A to B.



English - p.31 in your English homework book and Strive for 5.

Maths - Above & mathematics. I will check to see if you have been on!

	1st attempt	2nd attempt	3rd attempt
bought			
fought			
thought			
ought			
sought			
nought			
brought			
wrought			
afterthought			
thoughtfuln ess			

9th March

Answer these questions as quickly as you can. Record your time.

Section 1

Continue these linear sequences.

352, 1352 _____, _____, _____

43 908, 42 908, _____, _____, _____

78 612, 88 612, _____, _____, _____

39 901, 29 901, _____, _____, _____

Section 2

Ring the prime numbers:

11 12 13 14

15 16 17 18

19 20 21 22

23 24 25 26

27 28 29 30

Section 3

Calculate:

$6 \times 30 =$

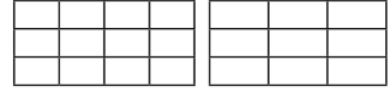
$90 \times 5 =$

$70 \times 80 =$

$10 \times 120 =$

Section 4

Shade the following rectangles so that the same fraction is shaded in both and write the fraction that each represents.



Section 5

Round the following numbers to the nearest whole number and nearest tenth:

4.55

9.03

7.92

68.05

Section 6

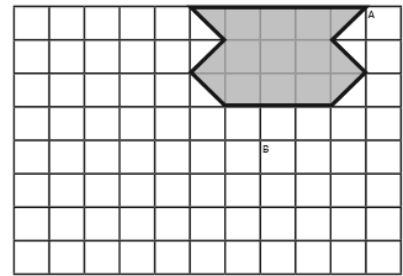
Afternoon lessons start at 12:50 and end at 15:10. How long are the afternoon lessons?

Section 7

Use a ruler to draw a rectangle where the longer side is three times the length of the shorter side.

Section 8

Translate this shape from point A to B.



English - p.31 in your English homework book and Strive for 5.

Maths - Above & mathematics. I will check to see if you have been on!

	1st attempt	2nd attempt	3rd attempt
expression			
discussion			
confession			
permission			
admission			
impression			
obsession			
procession			
omission			
concuSSION			