

Homework

Hand in on Monday 25th November

MATHS

We've been learning how multiplication facts can also be written using repeated addition.

Can you fill in the blank spaces?

If you're unsure just count the total number of bricks!

SPELLINGS

pencil
April
pupil
fossil
evil
nostril
gerbil
climb
every
everybody

READING

Try to read 5x or more each week so you can move your car along the reading race track!

Reading Records will be collected and checked


EVERY FRIDAY


HANDWRITING BOOK

Complete
Letter 'j'

page


Can you add the bumps on the building bricks to complete these multiplication calculations?


1.  $2 + 2 + 2 = \square$ $3 \times 2 = \square$


2.  $4 + 4 = \square$ $2 \times 4 = \square$

3.  $3 + 3 = \square$ $2 \times 3 = \square$


4.  $3 + 3 + 3 = \square$ $3 \times 3 = \square$


5.  $1 + 1 + 1 + 1 = \square$ $4 \times 1 = \square$

6.  $2 + 2 + 2 + 2 + 2 = \square$ $5 \times 2 = \square$

7.  $1 + 1 + 1 + 1 + 1 + 1 + 1 + 1 = \square$ $8 \times 1 = \square$

8.  $4 + 4 + 4 + 4 = \square$ $4 \times 4 = \square$

9.  $2 + 2 + 2 + 2 + 2 + 2 = \square$ $6 \times 2 = \square$

10.  $4 + 4 + 4 + 4 + 4 = \square$ $5 \times 4 = \square$

Homework

Hand in on Monday 25th November

MATHS

We've been learning how multiplication facts can also be written using repeated addition.

Can you fill in the blank spaces?

If you're unsure just count the total number of bricks!

SPELLINGS

three
thrill
thread
throb
threat
throw
threw
climb
every
everybody

READING

Try to read 5x or more each week so you can move your car along the reading race track!

Reading Records will be collected and checked


EVERY FRIDAY

HANDWRITING BOOK

Complete
Letter 'j'

page


Can you add the bumps on the building bricks to complete these multiplication calculations?


1.  $2 + 2 + 2 = \square$ $3 \times 2 = \square$


2.  $4 + 4 = \square$ $2 \times 4 = \square$

3.  $3 + 3 = \square$ $2 \times 3 = \square$


4.  $3 + 3 + 3 = \square$ $3 \times 3 = \square$

5.  $1 + 1 + 1 + 1 = \square$ $4 \times 1 = \square$

6.  $2 + 2 + 2 + 2 + 2 = \square$ $5 \times 2 = \square$

7.  $1 + 1 + 1 + 1 + 1 + 1 + 1 + 1 = \square$ $8 \times 1 = \square$

8.  $4 + 4 + 4 + 4 = \square$ $4 \times 4 = \square$

9.  $2 + 2 + 2 + 2 + 2 + 2 = \square$ $6 \times 2 = \square$

10.  $4 + 4 + 4 + 4 + 4 = \square$ $5 \times 4 = \square$

Homework

Hand in on Monday 25th November

MATHS

We've been learning how multiplication facts can also be written using repeated addition.

Can you fill in the blank spaces?

If you're unsure just count the total number of bricks!

SPELLINGS

kiss

miss

glass

pass

grass

class

my

they

READING

Try to read 5x or more each week so you can move your car along the reading race track!

Reading Records will be collected and checked


EVERY FRIDAY

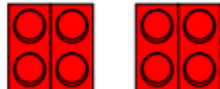
HANDWRITING BOOK

Complete
Letter 'j'


page


Can you add the bumps on the building bricks to complete these multiplication calculations?


1.  $2 + 2 + 2 = \square$ $3 \times 2 = \square$


2.  $4 + 4 = \square$ $2 \times 4 = \square$

3.  $3 + 3 = \square$ $2 \times 3 = \square$


4.  $3 + 3 + 3 = \square$ $3 \times 3 = \square$

5.  $1 + 1 + 1 + 1 = \square$ $4 \times 1 = \square$

6.  $2 + 2 + 2 + 2 + 2 = \square$ $5 \times 2 = \square$

7.  $1 + 1 + 1 + 1 + 1 + 1 + 1 + 1 = \square$ $8 \times 1 = \square$

8.  $4 + 4 + 4 + 4 = \square$ $4 \times 4 = \square$

9.  $2 + 2 + 2 + 2 + 2 + 2 = \square$ $6 \times 2 = \square$

10.  $4 + 4 + 4 + 4 + 4 = \square$ $5 \times 4 = \square$