

Homework

Hand in: Monday 20th May

MATHS

Solve the word problems.

Remember to:

Read the question carefully.

Decide whether to + - x or ÷.

Show all your workings in your book.

SPELLINGS

READING

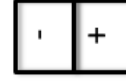
READ AT LEAST 4
TIMES EACH WEEK.

Use the PAWSOME
GANG to improve your
comprehension.

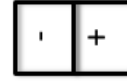
MUSIC

Find out and listen to what
song was No. 1 in the charts in
the week when you were born.

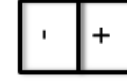
Can you hear the beat and
rhythm? Write down the name
of the song and artist.



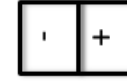
Aaron has 37p. He
spends 8p. How
much does he have
left?




James has 12p.
He spends 7p.
How much does
he have left?



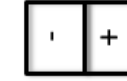
Jason buys a watch
(7p) and a drink
(9p). How much
does he spend
altogether?



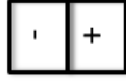
Mario buys a rubber (6p)
and a Pencil (5p). How
much does he spend
altogether?



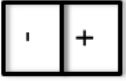
Amy has 15p. She
spends 9p. How
much does she have
left?



Katie buys a toy car
(18p) and some
sweets (6p). How
much does he
spend in total?



Melisa has 22p. She
spends 9p. How
much does she have
left?



Louise has 18p. He
spends 6p. How
much does he have
left?

Homework

Hand in: Monday 20th May

MATHS

Solve the word problems.

Remember to:

Read the question carefully.
Decide whether to + - x or ÷.
Show all your workings in your book.

SPELLINGS

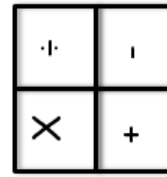
READING

**READ AT LEAST 4
TIMES EACH WEEK.**


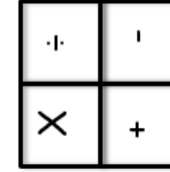
Use the PAWSOME
GANG to improve your
comprehension.

MUSIC

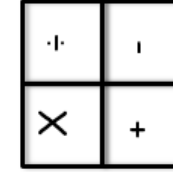
Find out and listen to what
song was No. 1 in the charts in
the week when you were born.
Can you hear the beat and
rhythm? Write down the name
of the song and artist.



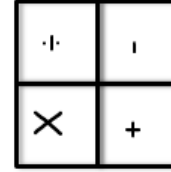
Amy has 16
Barbies. Poppy has
7 less than Amy.
How many does
Poppy have?



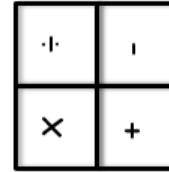
Wendy has 43
marbles. She loses
31. How many does
she have left?



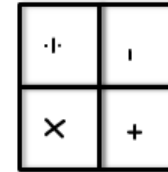
Amy saves 94p.
She spends 8p.
How much does
she have left?



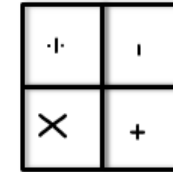
Miss Gaunt
eats 3 bananas
a day. How
many does she
eat in 4 days?



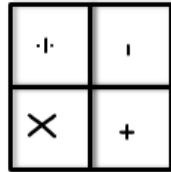
Jason took 40p
to the school
fete. He has 15p
left. How much
has he spent?



Ellie has 24 sweets. She
shares them among 6
friends. How many
sweets do they get
each?



There are 2
cakes in 1 box.
How many are
there in 4
boxes?



Ben has 22 cars.
James has 25 more
than Ben. How
many does James
have?

Homework

Hand in: Monday 20th May

MATHS

Solve the word problems.

Remember to:

Read the question carefully.
Decide whether to + - x or ÷.
Show all your workings in your book.

SPELLINGS

taking
coming
blaming
scaring
having
confusing
concentrating
amazing
fascinating
deciding

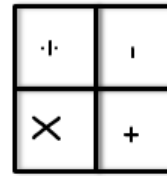
READING

READ AT LEAST 4
TIMES EACH WEEK.


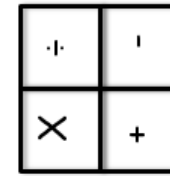
Use the PAWSOME
GANG to improve your
comprehension.

MUSIC

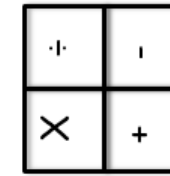
Find out and listen to what
song was No. 1 in the charts in
the week when you were born.
Can you hear the beat and
rhythm? Write down the name
of the song and artist.



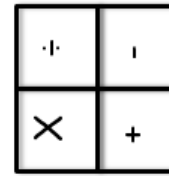
Amy has 16
Barbies. Poppy has
7 less than Amy.
How many does
Poppy have?



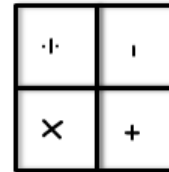
Wendy has 43
marbles. She loses
31. How many does
she have left?



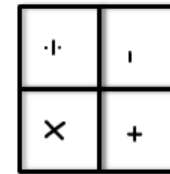
Amy saves 94p.
She spends 8p.
How much does
she have left?



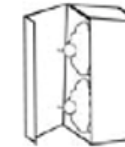
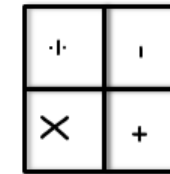
Miss Gaunt
eats 3 bananas
a day. How
many does she
eat in 4 days?



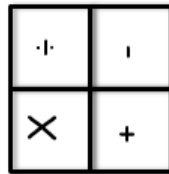
Jason took 40p
to the school
fete. He has 15p
left. How much
has he spent?



Ellie has 24 sweets. She
shares them among 6
friends. How many
sweets do they get
each?



There are 2
cakes in 1 box.
How many are
there in 4
boxes?



Ben has 22 cars.
James has 25 more
than Ben. How
many does James
have?

Homework

Hand in: Monday 20th May

MATHS

Solve the word problems.

Remember to:

Read the question carefully.
Decide whether to + - x or ÷.
Show all your workings in your book.

SPELLINGS

forcing
trading
removing
deciding
fascinating
concentrating
although
enough
consider
century

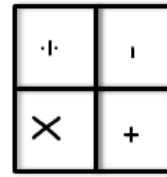
READING

READ AT LEAST 4
TIMES EACH WEEK.

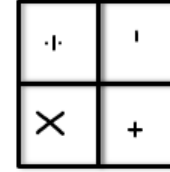
Use the PAWSOME
GANG to improve your
comprehension.

MUSIC

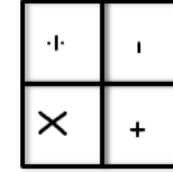
Find out and listen to what
song was No. 1 in the charts in
the week when you were born.
Can you hear the beat and
rhythm? Write down the name
of the song and artist.



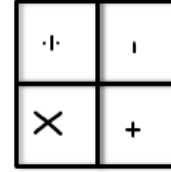
Amy has 16
Barbies. Poppy has
7 less than Amy.
How many does
Poppy have?



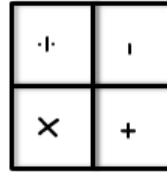
Wendy has 43
marbles. She loses
31. How many does
she have left?



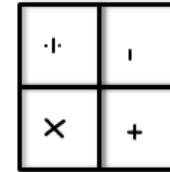
Amy saves 94p.
She spends 8p.
How much does
she have left?



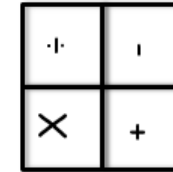
Miss Gaunt
eats 3 bananas
a day. How
many does she
eat in 4 days?



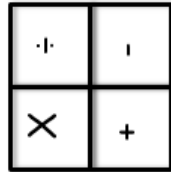
Jason took 40p
to the school
fete. He has 15p
left. How much
has he spent?



Ellie has 24 sweets. She
shares them among 6
friends. How many
sweets do they get
each?



There are 2
cakes in 1 box.
How many are
there in 4
boxes?



Ben has 22 cars.
James has 25 more
than Ben. How
many does James
have?

There are 65 children at Hill School.
 17 children have packed lunch.
 12 children go home for lunch.
 The other children have a school lunch.
 How many children have a school lunch?



Adam makes a call from a telephone box.
 He uses these five coins to make the call.



How much money has he got left from the £1?

There are 65 children at Hill School.
 17 children have packed lunch.
 12 children go home for lunch.
 The other children have a school lunch.
 How many children have a school lunch?



Adam makes a call from a telephone box.
 He uses these five coins to make the call.



How much money has he got left from the £1?

There are 25 people on the bus. Then 15 more get on. At the next stop, 8 get off the bus. How many people are now on the bus?



Alfie has 24 fish. One Saturday, he catches 18 more. The next day his cat eats 12. How many are left?



There are 25 people on the bus. Then 15 more get on. At the next stop, 8 get off the bus. How many people are now on the bus?



Alfie has 24 fish. One Saturday, he catches 18 more. The next day his cat eats 12. How many are left?



Gracie has £1.00 She buys two lollipops costing 25p each and a drink for 29p. How much money does she have left?



Hermione has some raspberries.
 She eats two of them.



Then she eats half of what is left.

She now has 7 raspberries.

How many raspberries did she have to start with?

Gracie has £1.00 She buys two lollipops costing 25p each and a drink for 29p. How much money does she have left?



Hermione has some raspberries.
 She eats two of them.



Then she eats half of what is left.

She now has 7 raspberries.

How many raspberries did she have to start with?